
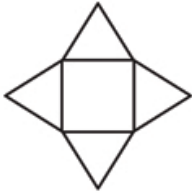
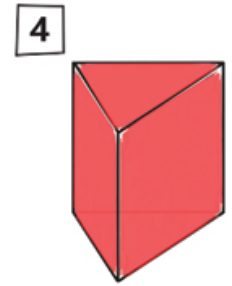
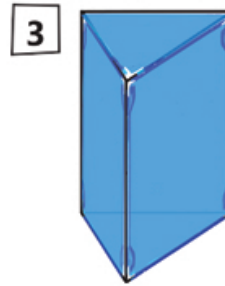
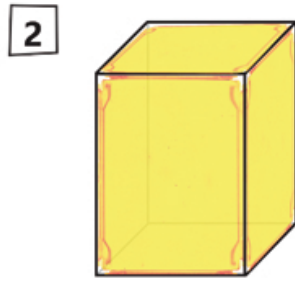
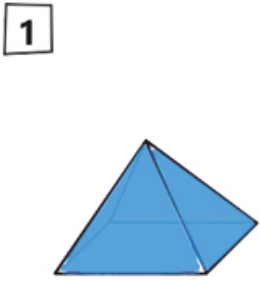


Lösungsblatt

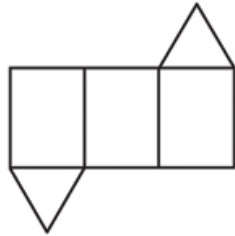
Netze zuordnen



Welches Netz gehört zu welchem Körper? Ordne zu und kreuze an.
 Baue die Netze und falte sie zusammen. Kontrolliere.



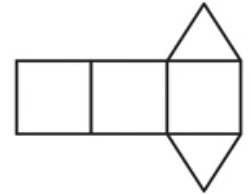
1 2 3 4



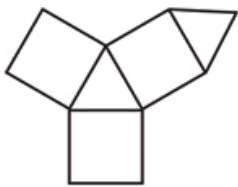
1 2 3 4




1 2 3 4



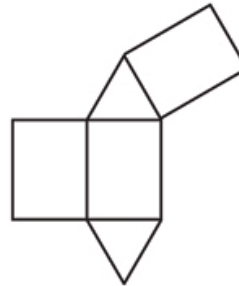
1 2 3 4



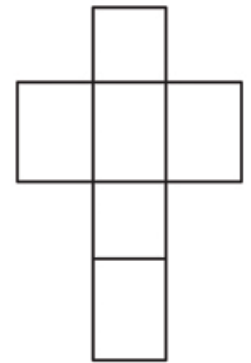
1 2 3 4



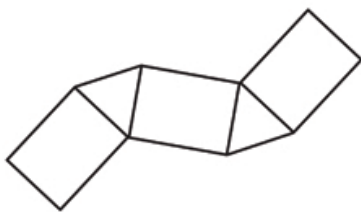
1 2 3 4



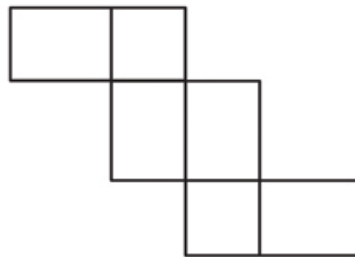
1 2 3 4



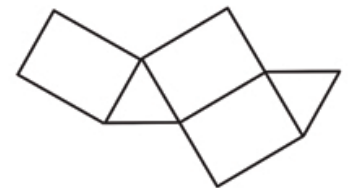
1 2 3 4



1 2 3 4



1 2 3 4



1 2 3 4